

NASHVILLE SCHOOL VALLE
SCIENCE WORKSHEET - II PARCIAL
3rd GRADE – Ms. ALICE ROMERO
alice.romero@nashvilleschool.edu.hn

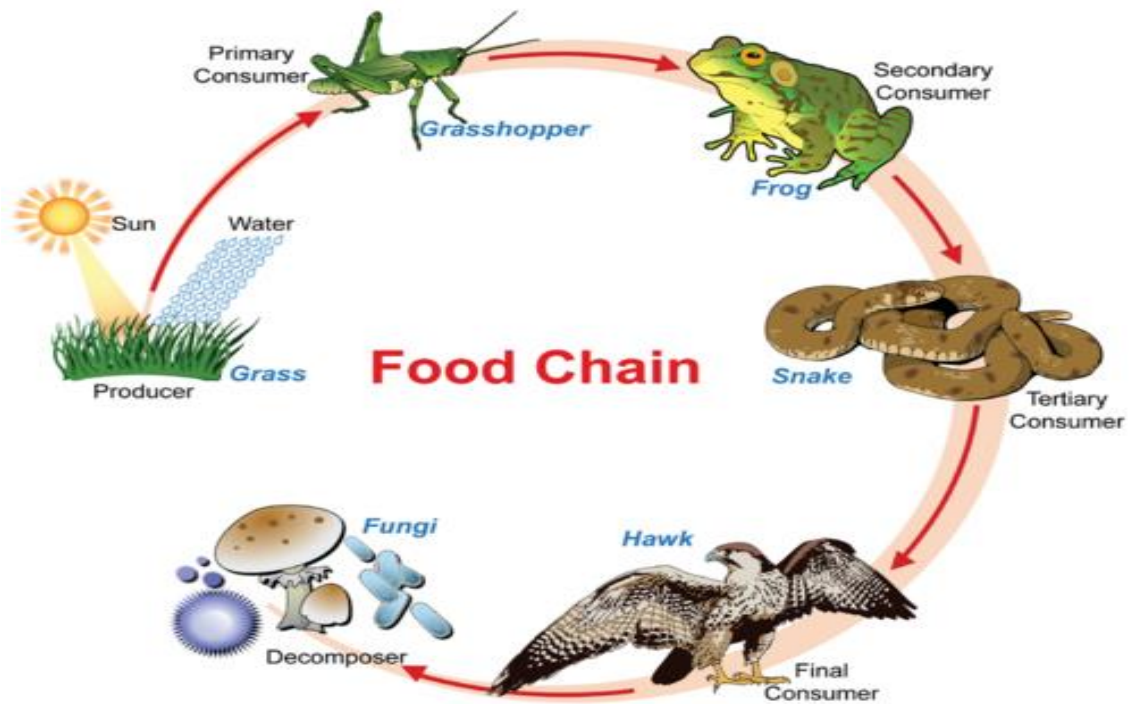
Name: _____ Date: _____

I. **Fill in the Blanks:** Write the words from the box next to the description it matches.

ecosystem	habitat	population	community
-----------	---------	------------	-----------

- _____ all the populations that live in the same place.
- _____ living things of the same kind that live in the same place.
- _____ living and nonliving parts interacting in an environment.
- _____ place where a living thing makes its home.

Read the text about the food chain.



A food chain shows the path of energy from one living thing to another. A food chain ALWAYS starts with energy from the sun to produce plants (producers), then passes from animal to animal (consumers), and ends in bacteria or fungi (decomposers).


II. **Match:** Write the names of the life forms in the correct column.




Grass



Worm




Rabbit



Hawk



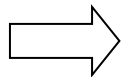
Fungi



Cactus

PRODUCERS

organisms that make their own food



CONSUMERS

organisms that feed on plants or animals



DECOMPOSERS

organisms that eat dead plants or animals, and then turn them into soil

1. _____

2. _____

3. _____

4. _____

5. _____

6. _____