


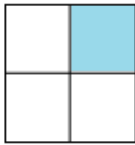
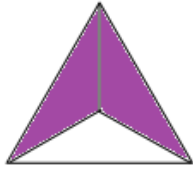


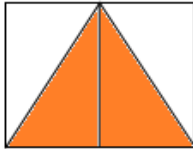


**NASHVILLE SCHOOL VALLE**  
**MATH WORKHEET – II PARCIAL**  
**2nd GRADE – Ms. Alma Matute**  
**alma.matute@nashvilleschool.edu.hn**



Name: \_\_\_\_\_ Date: \_\_\_\_\_

**Instructions:** Write the correct fraction in the following exercises.

		
$\frac{1}{2}$		
		

Instructions: Draw the half part missing in each figure.

